



Written Multiplication


1 Calculate:



$$\begin{array}{r} 158 \\ \times 23 \\ \hline \end{array}$$




$$\begin{array}{r} 587 \\ \times 32 \\ \hline \end{array}$$


 1349×12

3 marks

2 A television costs £369.


What is the total cost of 24 televisions?



1 mark

3 136 children are having a party.


Each child pays 75p towards food and drink.
How much money is this in total? Show your working.



1 mark

4 A box contains 2137 packets of screws. Each pack has 24 screws in it.

How many screws does the box contain altogether?
Show your working clearly.



1 mark

"I can multiply a four-digit number by a two-digit number."

